


# Year 1 Spring 1 Maths Activity Mat 5

## Section 1

How many apples are there altogether?



## Section 2

Sunnah has 13 candles. She needs 21.

How many more does she need?



## Section 3

Which shape has five sides?

## Section 5

What will the time be 4  $\frac{1}{2}$  hours?



## Section 6

What is double 20?


## Section 7

Make the highest number you can with these digits.

1 8 4


## Section 8

What time is on the clock?



## Section 4


How tall is the giraffe?



# Year 1 Spring 1 Maths Activity Mat 5 Answers

## Section 1

How many apples are there altogether?



## Section 2

Sunnah has 13 candles. She needs 21.

How many more does she need?



8

## Section 3

Which shape has five sides?

pentagon

## Section 4

How tall is the giraffe?

7.5m

## Section 5

What will the time be 4  $\frac{1}{2}$  hours?



8:30am

## Section 6

What is double 20?

40

## Section 7


Make the highest number you can with these digits.

1 8 4

841

## Section 8

What time is on the clock?




half past 10

# Year 1 Spring 1 Maths Activity Mat 5

## Section 1

How many apples are there altogether?



## Section 2

Maddie has 4 candles. She needs 9.

How many more does she need?




## Section 3

Which shape has only one side?

## Section 4

How tall is the giraffe?



## Section 5

What will the time be in 3 hours?



## Section 6

What is double 4?


## Section 7

Make the highest number you can with these digits.

2 7

## Section 8


What time is on the clock?



# Year 1 Spring 1 Maths Activity Mat 5 Answers

## Section 1

How many apples are there altogether?



## Section 2

Maddie has 4 candles. She needs 9.

How many more does she need?



## Section 3

Which shape has only one side?

circle

## Section 4

How tall is the giraffe?



## Section 5

What will the time be in 3 hours?



11am

## Section 6

What is double 4?

8

## Section 7


Make the highest number you can with these digits.

2 7

72

## Section 8

What time is on the clock?




5 o'clock

# Year 1 Spring 1 Maths Activity Mat 5

## Section 1

How many apples are there altogether?



## Section 2

Toby has 7 candles. He needs 13.

How many more does he need?




## Section 3

Which shape has four sides, all the same length?

## Section 4

How tall is the giraffe?



## Section 5

What will the time be in 5 hours?



## Section 6

What is double 9?


## Section 7

Make the highest number you can with these digits.

2 3 6

## Section 8

What time is on the clock?






# Year 1 Spring 1 Maths Activity Mat 5 Answers

## Section 1

How many apples are there altogether?



## Section 2

Toby has 7 candles. He needs 13.

How many more does he need?




## Section 3

Which shape has four sides, all the same length?

square

## Section 4

How tall is the giraffe?



## Section 5

What will the time be in 5 hours?



## Section 6

What is double 9?

18

## Section 7


Make the highest number you can with these digits.

2 3 6

632

## Section 8


What time is on the clock?



# Year 1 Spring 1 Maths Activity Mat 5

## Section 1

How many apples are there altogether?



## Section 2

Maddie has 4 candles. She needs 9.

How many more does she need?




## Section 3

Which shape has only one side?

## Section 4

How tall is the giraffe?



## Section 5

What will the time be in 3 hours?



## Section 6

What is double 4?


## Section 7

Make the highest number you can with these digits.

2 7

## Section 8


What time is on the clock?



# Year 1 Spring 1 Maths Activity Mat 5

## Section 1

How many apples are there altogether?



## Section 2

Toby has 7 candles. He needs 13.

How many more does he need?




## Section 3

Which shape has four sides, all the same length?

## Section 4

How tall is the giraffe?



## Section 5

What will the time be in 5 hours?



## Section 6

What is double 9?


## Section 7

Make the highest number you can with these digits.

2 3 6

## Section 8

What time is on the clock?






# Year 1 Spring 1 Maths Activity Mat 5

## Section 1

How many apples are there altogether?



## Section 2

Sunnah has 13 candles. She needs 21.

How many more does she need?





## Section 3

Which shape has five sides?

## Section 4

How tall is the giraffe?



## Section 5

What will the time be 4  $\frac{1}{2}$  hours?



## Section 6

What is double 20?


## Section 7

Make the highest number you can with these digits.

1 8 4

## Section 8


What time is on the clock?



# Year 1 Spring 1 Maths Activity Mat 5 Answers

## Section 1

How many apples are there altogether?



## Section 2

Maddie has 4 candles. She needs 9.

How many more does she need?




## Section 3

Which shape has only one side?

circle

## Section 4

How tall is the giraffe?



4m

## Section 5

What will the time be in 3 hours?



11am

## Section 6

What is double 4?

8

## Section 7


Make the highest number you can with these digits.

2 7

72

## Section 8

What time is on the clock?




5 o'clock

# Year 1 Spring 1 Maths Activity Mat 5 Answers

## Section 1

How many apples are there altogether?



## Section 2

Toby has 7 candles. He needs 13.

How many more does he need?




## Section 3

Which shape has four sides, all the same length?

square

## Section 4

How tall is the giraffe?



## Section 5

What will the time be in 5 hours?



## Section 6

What is double 9?

18

## Section 7


Make the highest number you can with these digits.

2 3 6

632

## Section 8


What time is on the clock?



# Year 1 Spring 1 Maths Activity Mat 5 Answers

## Section 1

How many apples are there altogether?



21

## Section 2

Sunnah has 13 candles. She needs 21.

How many more does she need?



8

## Section 3

Which shape has five sides?

pentagon

## Section 4

How tall is the giraffe?



7.5m

## Section 5

What will the time be 4  $\frac{1}{2}$  hours?



8:30am

## Section 6

What is double 20?

40

## Section 7


Make the highest number you can with these digits.

1 8 4

841

## Section 8

What time is on the clock?



half past 10